





























2. Да се поврзат точките - Да се напишат и научат броевите.
Нула = 0.



15. Да се поврзат точките - Да се напишат и научат броевите.

Два = 2.



27. Да се обојат броевите во различни бои.

Три = 3.

3 3 3 3 3

3 3 3 3 3

3 3 3 3 3

3 3 3 3 3

39. Да се обојат броевите во различни бои.

Четири = 4.



48. Да се обојат во различни бои и да се научат броевите.

7 3 5 2

7 3 5 2

7 3 5 2

7 3 5 2

65. Да избројат фигурите и напише бројот.



10 10 10 10 10

66. Да избројат фигурите и напише бројот.

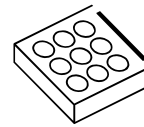
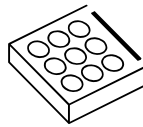
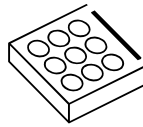


1

86. Да избројат фигурите и напише бројот.



106. Да се заокружи точниот број на фигурите.



4

3


107. Да се заокружи точниот број на фигурите.



7

9

108. Да се заокружи точниот број на фигурите.



5

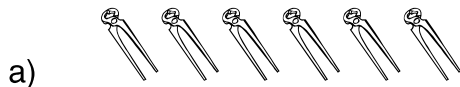
7

113. Да се заокружи точниот број на фигурите.



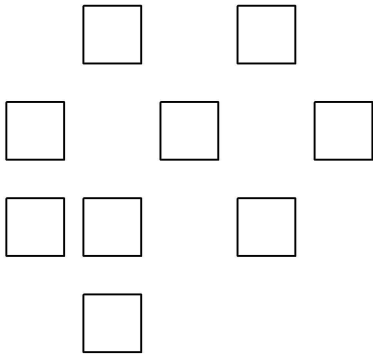
6 1 8 2

114. Да се заокружи точниот број на фигурите.

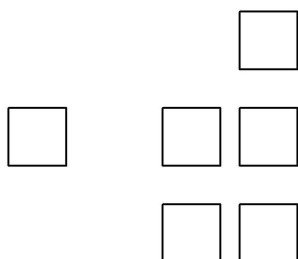


6 10 2 3

115. Има точно _____ квадрати.



116. Има точно _____ квадрати.




137. Да се напише колку квадрати има во секој ред.

138. Да се одреди по колку фигури има во секој ред.

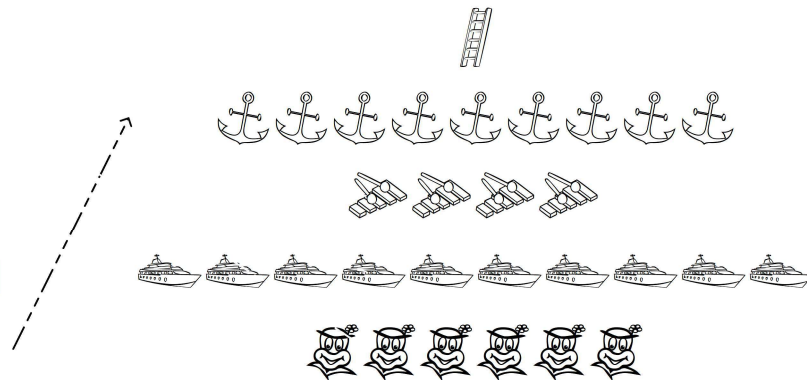
163. Да се избројат фигурите и да се поврзат..

четири
девет
осум
десет
еден



164. Да се избројат фигурите и да се поврзат..

еден
шест
десет
четири
девет



165. Да се избројат фигурите и да се поврзат..

девет
шест
осум
четири
десет

